














Y4 – Spring – Block 1 – Step 5 – Divide by 10 Answers

Question	Answer												
1	There are 4 groups of 10 in 40 40 = 4 groups of 10 40 ÷ 10 = 4												
2	a) 3 b) 6 c) 9 d) 8 e) 10 f) 12												
3	13												
4	a) She will then only have tens, so the number of tens is equal to 150 ÷ 10 b) 150 = 1 hundred + 5 tens 1 hundred = 10 tens Whitney has 15 tens altogether. 150 ÷ 10 = 15												
5	a)  b) 230 = 2 hundreds + 3 tens 2 hundreds = 20 tens There are 23 tens altogether. 230 ÷ 10 = 23												
6	a) Tiny has only moved the counters in the tens column. b) <table border="1" data-bbox="262 1257 518 1396"><tr><th>H</th><th>T</th><th>O</th></tr><tr><td></td><td></td><td></td></tr></table> <p style="text-align: center;">↓ ÷ 10</p> <table border="1" data-bbox="262 1448 518 1587"><tr><th>H</th><th>T</th><th>O</th></tr><tr><td></td><td></td><td></td></tr></table> c) 250 ÷ 10 = 25	H	T	O				H	T	O			
H	T	O											
													
H	T	O											
													
7	a) 36 b) 63 c) 52 d) 410 e) 75 f) 86												
8	34												

Y4 – Spring – Block 1 – Step 5 – Divide by 10 Answers (continued)

Question	Answer
9	39
10	a) 12 b) 9 c) 9 d) 40